

PROCEDURAL

8EP15

First name _____

Last name _____

School _____

Class _____

Date of birth ○○ ○○ ○○○○

Date of test ○○ ○○ 2015

Total score (maximum 36)



128917



Llywodraeth Cymru
Welsh Government

1

$$8 \times 4 \div (4 \times 2) =$$

1m

2

All books:
£5.99 each



Work out the greatest number of books you can buy with £45

books

1m

3

Find 25% of £36

£

1m

4

Time in Wrexham

11:00

Time in New York

06:00

Later that day it is 14:30 in Wrexham.

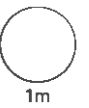
What time is it in New York?

:

1m

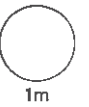
5 Complete the table.

	Greater than $\frac{1}{2}$	Less than $\frac{1}{2}$
3	✓	
0.09		
$\frac{2}{3}$		
0.28		



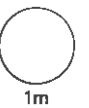
6

0.7 km = metres



7

14 × 11 =

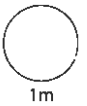


8 Subtract 0.09 from 0.1

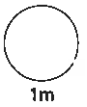


9 Complete the three boxes on this invoice.

<input type="text"/>	hours at £35 for each hour: total cost	£280
	plus tax at 20% of the total cost	£ <input type="text"/>
	Grand total	£ <input type="text"/>

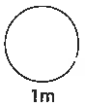


1m



1m


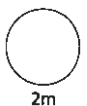
10 Work out how many thirds there are in $4\frac{1}{3}$



1m

11 A 250g block of cheese costs £1.80

How much is that per 100g?

2m

12

1.24 + 1.25 + 1.26 =

1m

13

Menu	
Eggs on toast	£2.49
Curry with rice	£6.95
Fish stew	£6.99

2 people order eggs on toast, 3 people order curry with rice and 1 person orders fish stew.

Estimate the total cost, to the nearest £.

£

1m

14

90 × = 0.9

1m

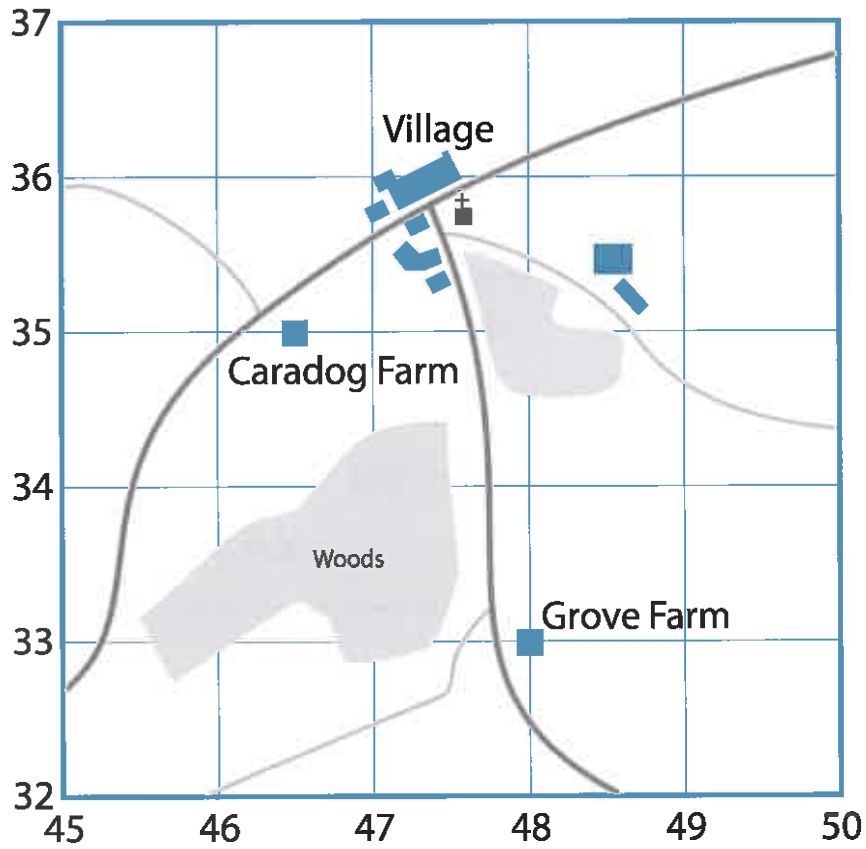
15

Round 777 777 to three significant figures.

1m

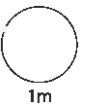
TOTAL
9m

16



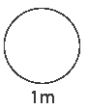
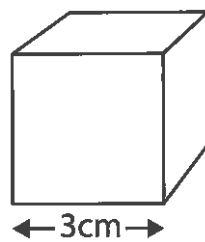
The six-figure grid reference for Grove Farm is 480330

Write a six-figure grid reference for Caradog Farm.



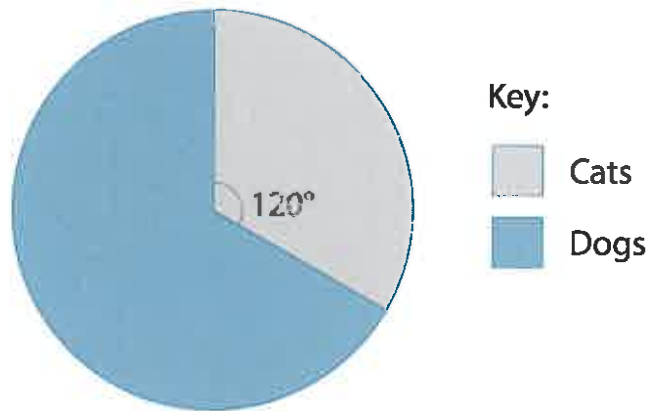
17

Work out the **volume** of the cube.



18

Pie chart to show the proportion of cats and dogs in a rescue centre



The ratio of **cats** to **dogs** is

1 :

The ratio of **dogs** to **cats** is

1 :

1m

1m

19

Work out $5^3 - 5^2$

2m

20

Circle the fraction that is nearest in value to 0.6

$\frac{3}{6}$

$\frac{2}{5}$

$\frac{11}{20}$

$\frac{7}{10}$

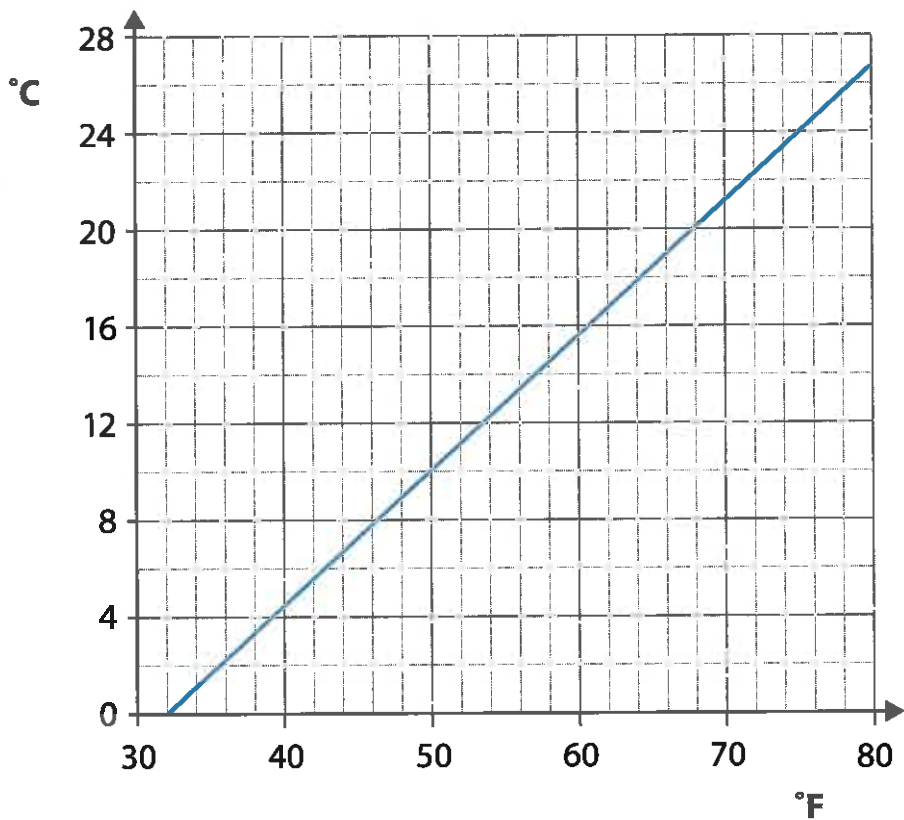
1m

TOTAL

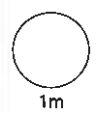
7m

21

Changing between °F and °C

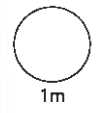


$13^{\circ}\text{C} =$ $^{\circ}\text{F}$

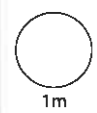


When the temperature goes up by 25°F ,
what does it go up by in $^{\circ}\text{C}$?

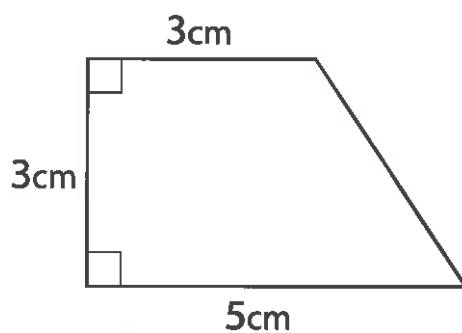
$^{\circ}\text{C}$



22 The reciprocal of $\frac{2}{5}$ is



23 Work out the area of this shape.



cm²

2m

24

Original price £3000
Price reduced by %
Now only £1200

Circle the percentage below that shows how much the price has been reduced.

18%

40%

42%

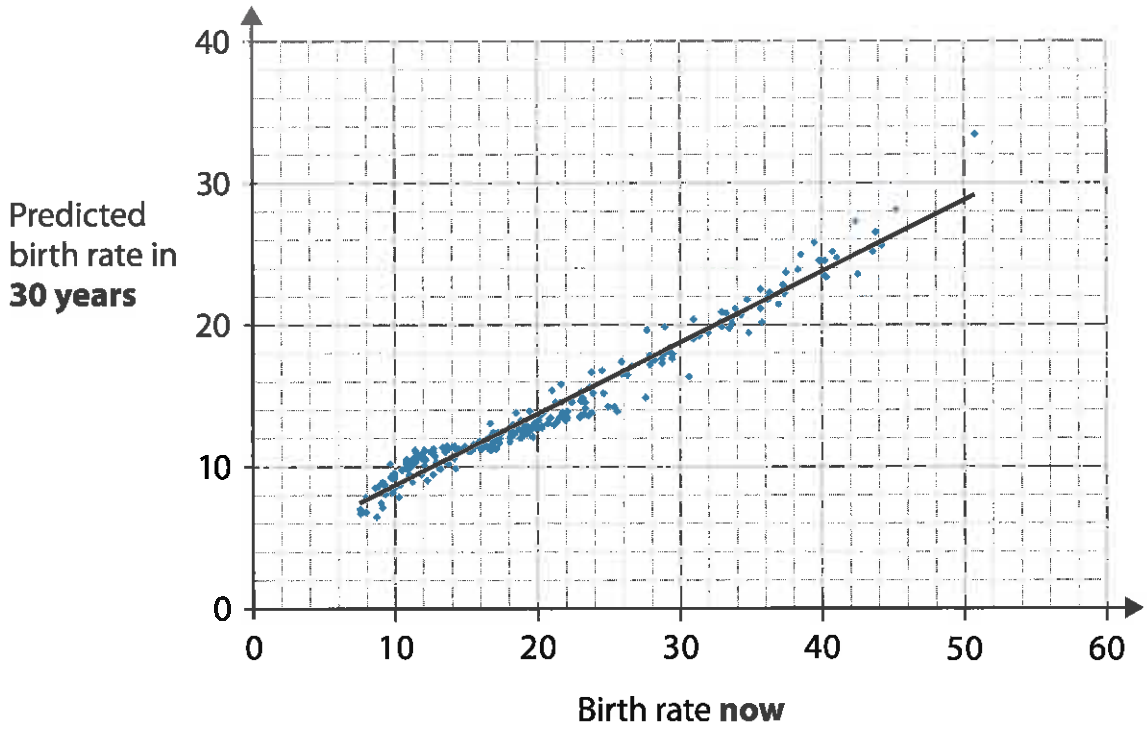
60%

75%

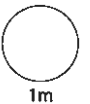
1m

TOTAL
6m

Scatter graph showing yearly birth rates per 1000 people in countries across the world

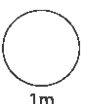


What type of correlation does the scatter graph show?



The birth rate now in a different country is 45

Use the line of best fit to predict its birth rate in 30 years.



26

How many litres is 6 pints?

4 pints =
2.27 litres



litres

2m

27

Questionnaire in a restaurant

How good was the service?

1 (excellent) 2 (good) 3 (satisfactory) 4 (poor)

20 people answered the questionnaire.

3 people gave a score of 1 and 9 people gave a score of 2

Everyone else gave a score of 3

What is the **mean** score?



2m

TOTAL

6m

© Crown copyright 2015